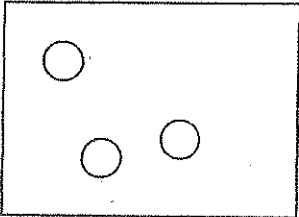
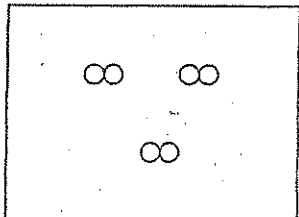
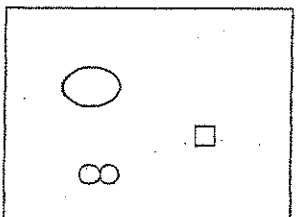
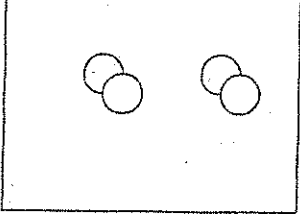
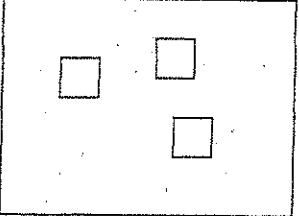
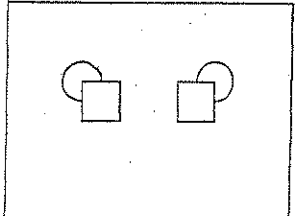


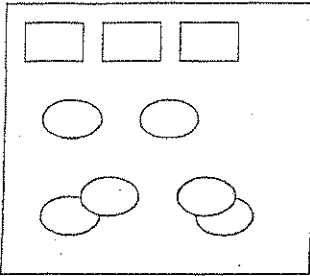
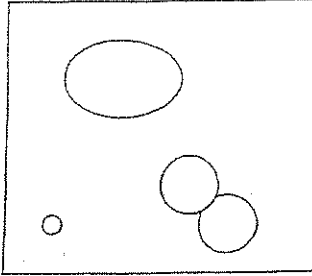
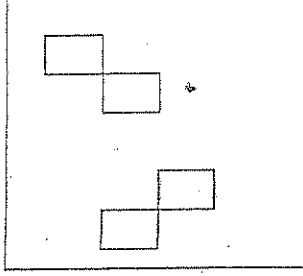
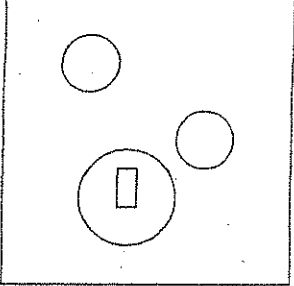
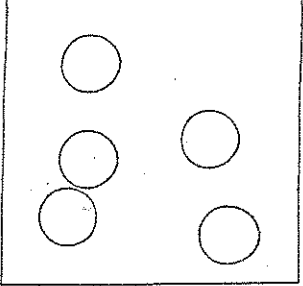
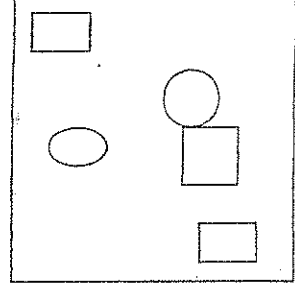
Name: _____

Pure Substances and Mixtures

Instructions:

- Identify whether the following is a pure substance or mixture.
(P or M)
- Give a reason for your choice. (ie. Identical or Different Particles)
- If it is a pure substance, identify whether its an element or compound. (E or C)

<p>1.</p>  <p>P.S. or M: _____</p> <p>Reason: _____</p> <p>E or C: _____</p>	<p>2.</p>  <p>P.S. or M: _____</p> <p>Reason: _____</p> <p>E or C: _____</p>	<p>3.</p>  <p>P.S. or M: _____</p> <p>Reason: _____</p> <p>E or C: _____</p>
<p>4.</p>  <p>P.S. or M: _____</p> <p>Reason: _____</p> <p>E or C: _____</p>	<p>5.</p>  <p>P.S. or M: _____</p> <p>Reason: _____</p> <p>E or C: _____</p>	<p>6.</p>  <p>P.S. or M: _____</p> <p>Reason: _____</p> <p>E or C: _____</p>

<p>7.</p>  <p>P.S. or M: _____</p> <p>Reason: _____</p> <p>_____</p> <p>E or C: _____</p>	<p>8.</p>  <p>P.S. or M: _____</p> <p>Reason: _____</p> <p>_____</p> <p>E or C: _____</p>	<p>9.</p>  <p>P.S. or M: _____</p> <p>Reason: _____</p> <p>_____</p> <p>E or C: _____</p>
<p>10.</p>  <p>P.S. or M: _____</p> <p>Reason: _____</p> <p>_____</p> <p>E or C: _____</p>	<p>11.</p>  <p>P.S. or M: _____</p> <p>Reason: _____</p> <p>_____</p> <p>E or C: _____</p>	<p>12.</p>  <p>P.S. or M: _____</p> <p>Reason: _____</p> <p>_____</p> <p>E or C: _____</p>